

Teacher: _____ Period: ____ Date: _____ Your Grade: ____ Your Initials: ____

DRK-12 Carbon Assessment, Form A

Fall, 2013

Please don't include this first sheet in student copies.

This assessment is designed to elicit middle school or high school students' accounts of carbon-transforming processes.

Items 3, 5, 6, 12, and 15 were developed by AAAS Project 2061 and are available on their assessment website: <http://assessment.aaas.org/>.

This assessment was developed with support from the National Science Foundation, Grant number DRL 1020187: A Learning Progression-based System for Promoting Understanding of Carbon-transforming Processes. Prior development of some items was supported by grants from the National Science Foundation: Learning Progression on Carbon-Transforming Processes in Socio-Ecological Systems (NSF 0815993), and Targeted Partnership: Culturally relevant ecology, learning progressions and environmental literacy (NSF-0832173), and CCE: A Learning Progression-based System for Promoting Understanding of Carbon-transforming Processes (DRL 1020187). Additional support comes from the Great Lakes Bioenergy Research Center. Any opinions, findings, and conclusions or recommendations expressed in this material are those of the author(s) and do not necessarily reflect the views of the National Science Foundation or the United States Department of Energy.

Teacher: _____ Period: ____ Date: _____ Your Grade: ____ Your Initials: ____

Form A—Introduction

This test will not affect your grade, but it is important. Your teacher is participating in a research project focusing on science learning. We are trying to learn how to teach science better. You can help us by answering these questions and explaining your ideas carefully.

Practice Question

You will have several questions on this test that ask you to make two different choices about something. This is a practice question to help you understand how you should answer those questions. Try doing this practice question, then talk with your teacher if you have questions about it.

This question is about the 25 letters below:

A	A	A	A	A
A	B	A	A	B
A	B	A	d	A
A	B	A	A	A
A	A	A	A	E

Which of the following statements is true? Circle the letter of the correct answer.

- a. ALL of the letters are capital letters, OR
- b. SOME of the letters are lower case letters.

Circle the best choice to complete each of the statements about the capital letters.

How many of the capital letters are A's?	All or most	Some	None
How many of the capital letters are B's?	All or most	Some	None
How many of the capital letters are C's?	All or most	Some	None
How many of the capital letters are E's?	All or most	Some	None

Correct answers

Did you answer the questions this way?

Which of the following statements is true? Circle the letter of the correct answer.

- a. ALL of the letters are capital letters, OR
- b. SOME of the letters are lower case letters.

Note that you have to choose either a or b.

Circle the best choice to complete each of the statements about the colored rectangle.

How many of the capital letters are A's?	All or most	Some	None
How many of the capital letters are B's?	All or most	Some	None
How many of the capital letters are C's?	All or most	Some	None
How many of the capital letters are E's?	All or most	Some	None

Note that you can make a different choice for each color

Form A: 2013-2014

1. Like all materials, the wood of a large oak tree is made of atoms. There were some atoms in the original acorn that the oak tree grew from.



Where do you think the additional atoms came from?

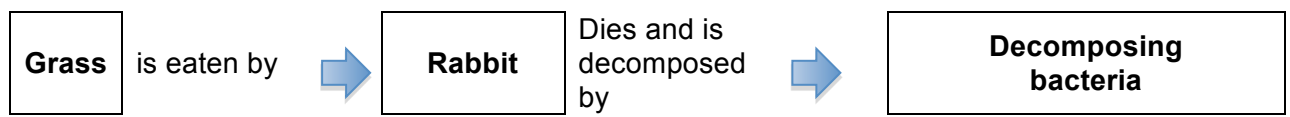
- a. ALL of the additional atoms were originally outside the tree,
- b. SOME of the additional atoms were made by the tree as it grew.

Circle the best choice to answer each question about possible sources of mass from outside the tree.

How much of the dry mass comes from the AIR?	All or most	Some	None
How much of the dry mass comes from SUNLIGHT?	All or most	Some	None
How much of the dry mass comes from WATER?	All or most	Some	None
How much of the dry mass comes from SOIL NUTRIENTS?	All or most	Some	None

Explain your choices. How does the oak tree gain mass as it grows?

2. Here is a simple food chain with one plant, one animal, and some decomposers:



Answer true or false to the following questions:

- True False The **molecules** in the rabbit came from the grass without changing.
- True False The **atoms** in the rabbit came from the grass without changing.
- True False The **energy** in the rabbit came from the grass without changing.
- True False The bacteria recycle **molecules** from the dead rabbit back to the grass.
- True False The bacteria recycle **atoms** from the dead rabbit back to the grass.
- True False The bacteria recycle **energy** from the dead rabbit back to the grass.

Explain your answers: How do **molecules** move through the ecosystem that this food chain is part of?

Explain your answers: How do **atoms** move through the ecosystem that this food chain is part of?

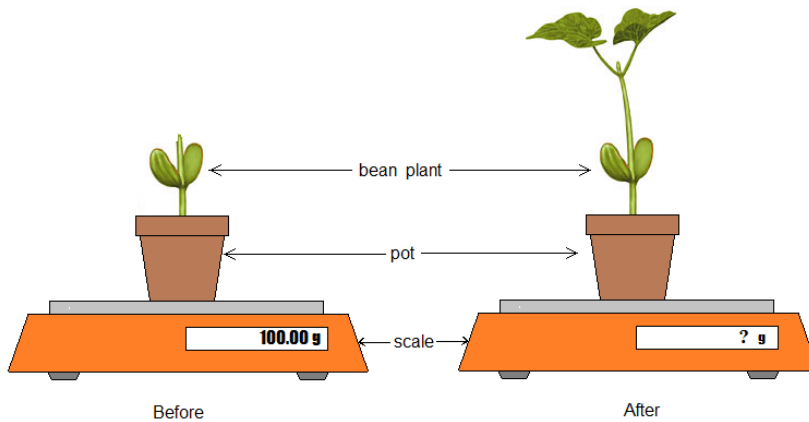
Teacher: _____ Period: ____ Date: _____ Your Grade: ____ Your Initials: ____

Explain your answers: How does **energy** move through the ecosystem that this food chain is part of?

3. As an animal grows, what happens to the food that it eats?

- a. All of the food is changed into waste that leaves the animal's body.
 - b. All of the food is changed into energy in the animal's body and so the food is used up.
 - c. Some of the food is changed into energy, and the rest leaves the animal's body as waste.
 - d. Some of the food is changed into new substances that become part of the animal's body.

4. The following is an experiment regarding plant growth. Suppose we have a growing bean plant in a small pot with plenty of soil and make sure it always has the same amount of water in the soil. The pot is NOT sealed. Gases and water are the only things that can get in or out. At the beginning of the experiment, the pot, plant, and soil weighed exactly 100 g.



At the end of the experiment, the plant has grown bigger. How much would you expect the pot, plant, and soil to weigh?

- a. More than 100 g.
 - b. Still exactly 100 g.

Explain the reason for your prediction. If you think there will be more or less mass, explain where the mass will come from or go.

Teacher: _____ Period: ____ Date: _____ Your Grade: ____ Your Initials: ____

5. A tree falls and gradually decays while it is sitting on the ground. Answer these questions about what is happening to the materials and energy in the tree as it decays.



Do you think that materials (solids, liquids, or gases) are going into the decaying tree? (circle one answer below) Yes No I'm not sure	Do you think that energy is stored inside the decaying tree? (circle one answer below) Yes No I'm not sure
What materials do you think are going into the decaying tree?	What form(s) of energy do you think are stored inside the decaying tree?
What materials do you think the decaying tree is made of?	
Do you think that materials (solids, liquids, or gases) are coming out of the decaying tree? (circle one answer below) Yes No I'm not sure	Do you think that energy is coming out of the decaying tree? (circle one answer below) Yes No I'm not sure
What materials do you think are coming out of the decaying tree?	What form(s) of energy do you think are coming out of the decaying tree?
How do you think that materials are changing inside the decaying tree?	How do you think that energy is changing inside the decaying tree?
What are you not sure about in your answers? Explain what you need to know to answer these questions better.	

6. A loaf of bread was left alone for 2 weeks. Three different kinds of mold grew on it. Assuming the bread did not dry out, which of the following is a reasonable prediction of the weight of the bread and mold after the 2-week period?

<p>a. The mass has increased, because the mold has grown.</p> <p>b. The mass remains the same as the mold converts bread into biomass.</p> <p>c. The mass decreases as the growing mold converts bread into energy.</p> <p>d. The mass decreases as the mold converts bread into biomass and gases.</p>

Please explain your answer.

--

Teacher: _____ Period: ____ Date: _____ Your Grade: ____ Your Initials: ____

7. When alcohol burns, the alcohol loses weight. What happened to the **matter** that used to be in the alcohol? Which of the following statements is true? Circle the correct answer.

ALL of the matter is still somewhere in the environment, OR
SOME of the matter was consumed by the flame and no longer exists.

Circle the best choice to answers the questions about possible places where the matter in the alcohol might go.


How much of the matter in the alcohol goes into the AIR?	All or most	Some	None
How much of the matter in the alcohol turns into HEAT AND LIGHT ENERGY?	All or most	Some	None
How much of the matter in the alcohol IS BURNED UP AND DISAPPEARS?	All or most	Some	None
How much of the matter in the alcohol goes into WATER VAPOR?	All or most	Some	None

- c. Explain your choices. What happens to the matter in alcohol as it burns?

- d. Does the air change when alcohol burns? YES NO

- e. If you answered "yes" explain how the air changes when alcohol burns.

8. A student places some baking soda and a jar of lemon juice in a plastic bag and seals the bag. She weighs the bag and everything in it. She shakes the bag so that the lemon juice spills out of the jar and mixes with the baking soda inside the bag. The student observes that bubbles form and the bag expands. If the student weighs the bag and everything in it after the bubbling stops and compares the final weight to the starting weight, what will she find out?



- a. The final weight will be greater than the starting weight because new atoms are produced during the experiment.
- b. The final weight will be less than the starting weight because some of the atoms are destroyed during the experiment.
- c. The final weight will be the same as the starting weight because the number of each kind of atom does not change during the experiment.
- d. The final weight will be the same as the starting weight because some atoms are destroyed, but new ones are created during the experiment.

Teacher: _____ Period: ____ Date: _____ Your Grade: ____ Your Initials: ____

9. A student has two different liquids in open jars. She pours the liquid from one jar into the other jar, and she observes bubbles. After the bubbling stops, she finds that the total weight of the liquids is now less than the total weight of the liquids before they were mixed together.



How can her observation be explained?

- a. Some atoms went into the air.
- b. Some atoms were destroyed.
- c. Some atoms became heavier.
- d. Some atoms became lighter

10. Grass needs energy to live and grow. How does it get its energy?
Which of the following statements is true? Circle the letter of the correct answer.

- a. ALL of the grass's energy came originally from sources outside the plant, **ORIGINALLY**
- b. **SOME** of the grass's energy was made by the plant as it grew.


Circle the best choice to complete each of the statements about possible sources of energy from outside the grass.

How much of the grass's energy come from AIR?	All or most	Some	None
How much of the grass's energy come from SUNLIGHT?	All or most	Some	None
How much of the grass's energy come from WATER?	All or most	Some	None
How much of the grass's energy come from SOIL NUTRIENTS?	All or most	Some	None

Explain your choices. How does the grass get its energy?

11. Milk contains water, carbohydrates, proteins, minerals, and fat. Is milk food for people?

- a. No, because liquids cannot be food, and milk is a liquid
- b. No, because for something to be food it must provide both energy and building materials, and milk does not provide energy
- c. Yes, because for something to be food it must provide energy, and the minerals in milk provide energy
- d. Yes, because food is a source of energy and building materials, and milk provides energy and building materials



Teacher: _____ Period: ____ Date: _____ Your Grade: ____ Your Initials: ____

12. When a tree is alive it has energy stored in its living parts (roots, trunk, branches and green leaves). When the tree dies all the parts are still there (including fallen brown leaves). How much of the energy stored in the living tree is still there in the dead tree?

- a. ALL of the energy
- b. MOST of the energy
- c. SOME of the energy
- d. A LITTLE of the energy
- e. NONE of the energy



What kinds of energy are stored in the dead tree (if any)? How are they connected to the energy in the living tree?

What happens to the energy stored in the tree when the dead tree decays?

13. In autumn, people pile fallen leaves and send them to the trash dump. After several weeks, the pile becomes warm. Where does the heat come from?



Teacher: _____ Period: ____ Date: _____ Your Grade: ____ Your Initials: ____

14. A potato is left outside and gradually decays. One of the main materials in the potato is the starch, which is made of many sugar molecules ($C_6H_{12}O_6$) bonded together. What happens to the atoms in starch molecules as the potato decays? Circle True or False for each option.

True	False	Some of the atoms are changed into soil nutrients: nitrogen and phosphorus.
True	False	Some of the atoms are used up by decomposers and no longer exist.
True	False	Some of the atoms go into the air in carbon dioxide.
True	False	Some of the atoms are turned into energy by decomposers.
True	False	Some of the atoms go into the air in water.

Explain the pattern in your answers. What happens to the atoms in the starch when the potato decays?

15. Answer these true-false questions.

True	False	Carbon is a kind of atom.
True	False	Carbon is a kind of molecule.
True	False	There is carbon in pure air.
True	False	There is carbon in pure water.
True	False	There is carbon in an insect's shell.

16. A national park is home to large populations of mountain lions, deer, rabbits, and grass. Recently, park rangers decided to introduce wolves to the park. Mountain lions and wolves both eat deer and rabbits. Deer and rabbits both eat grass. If the number of deer and rabbits eaten by the mountain lions stays the same, what will happen to the grass after wolves are introduced? Use only the relationships between the plants and animals described above.

a. The amount of grass will increase.
b. The amount of grass will stay the same.
c. The amount of grass will decrease until it is all gone.
d. The amount of grass will decrease, but some will remain.